

KENDRIYA VIDYALAYA SEONI MALWA  
HALF YEARLY EXAM ( 2020- 21)





Time - 120 minutes.  
Name - .....  
Class & sec - .....  
Invigilator's Sig - .....  
.....

Max Marks: 80  
Roll no. ....  
Date - .....  
Checker's Sig

Observation & reporting (30)	Identification & classification ( 25)	Discovery of facts (25)	Total (80)

OBSERVATION & REPORTING

Q1. Match the picture with the list accordingly which produces heat in each of them. (7)

	<p>Kerosene Oil</p> <p>Coal</p> <p>Electricity</p>	
	<p>Gas</p> <p>Wood</p> <p>Sunlight</p>	
	<p>Cowdung cakes</p>	

Which cooking appliance would you like to use in your house from above images ? (2)

Ans .....

Q2. In the clock show the time when you ( 6)



Wake up in the morning      Go to school      Return from school

Q3. Name three vehicles in which you have travelled.

Ans. 1. .... 2. .... 3. .... (3)

Q4. Name three things that are eaten raw.

Ans 1. .... 2. .... 3. .... (3)

Q5. Write two food items made from: (4)

Ans Rice - 1. .... 2. ....

Wheat - 1. .... 2. ....

Q6. Draw and write the name of two animals that live in your house uninvited. (5)

--	--



